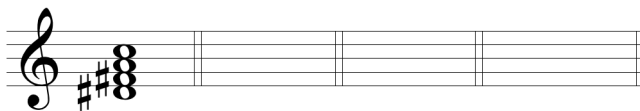


EXERCISE 45-1 Chord spelling and reinterpretation

Respell the given chord, identify the root of each respelled chord, and identify the new keys. The first problem is done as a model.

MODEL




Root: _____
 Symbol: ____: vii⁰⁷ ____: vii⁰⁴₂ ____: vii⁰⁴₃ ____: vii⁰⁶₅

SOLUTION



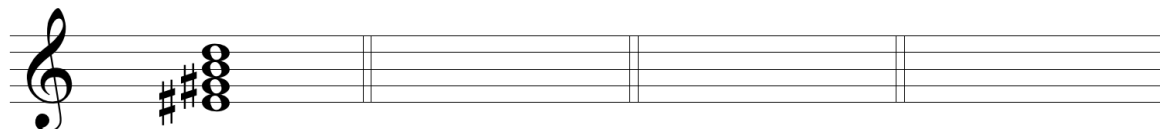
Root: D# F# A C
 Symbol: E: vii⁰⁷ G: vii⁰⁴₂ Bb: vii⁰⁴₃ Db: vii⁰⁶₅

SET 1



Root: _____
 Symbol: ____: vii⁰⁷ ____: vii⁰⁴₂ ____: vii⁰⁴₃ ____: vii⁰⁶₅

SET 2



Root: _____
 Symbol: ____: vii⁰⁷ ____: vii⁰⁴₂ ____: vii⁰⁴₃ ____: vii⁰⁶₅